




## Finding What Belongs

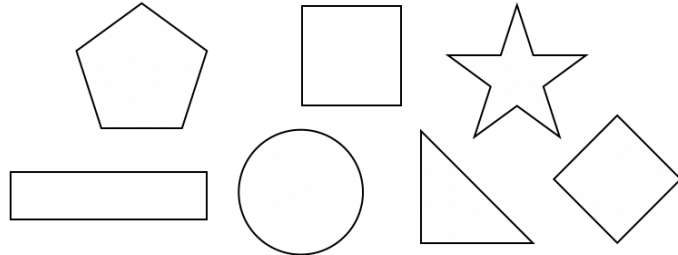
Set 1

5                      12                      4                      7  
                     9                                      6  
 11                      3                                      14                      2


Set 2



Set 3




Set 4



Set 5



Set 6





Finding What Belongs  
**SOLUTIONS**

Set 1

5 12 4 7  
9 6 3  
11 14 2

Set 2

Set 3

Set 4

Set 5

Set 6