

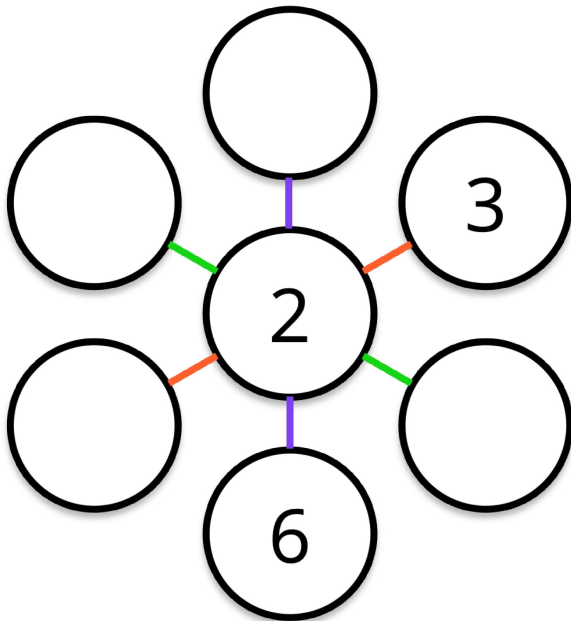


MATHS
QUEST
2026

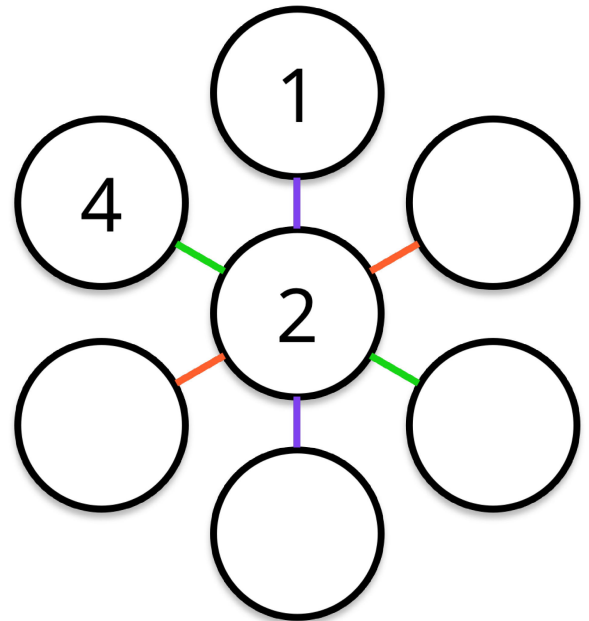
Name/s: _____

All Lines Alike A

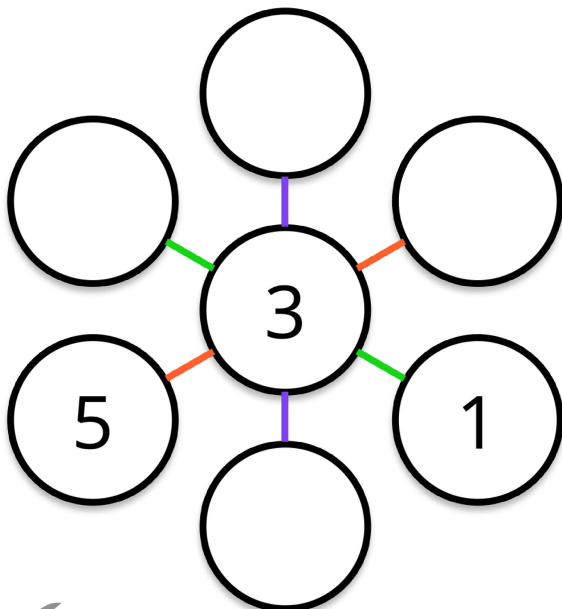
Place **4, 2, 5 and 1** into a circle.
Each line of circles must add up to **9**.



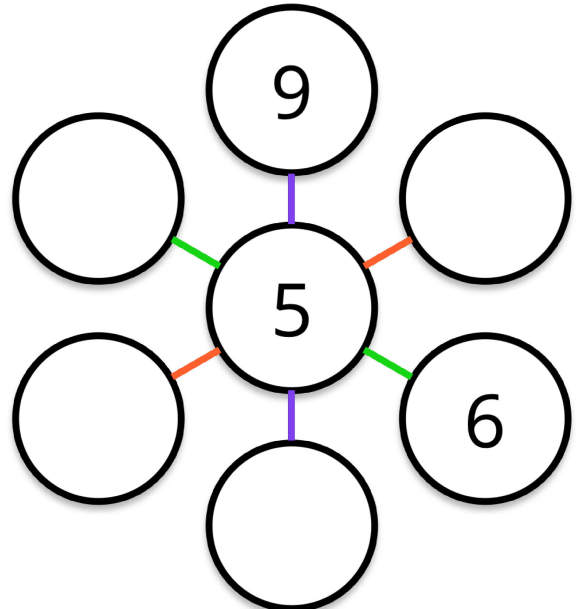
Place **5, 3, 7 and 4** into a circle.
Each line of circles must add up to **10**.



Place **8, 2, 4 and 7** into a circle.
Each line of circles must add up to **12**.



Place **3, 7, 1 and 4** into a circle.
Each line of circles must add up to **15**.



1	2	3	4	5	7	8
---	---	---	---	---	---	---

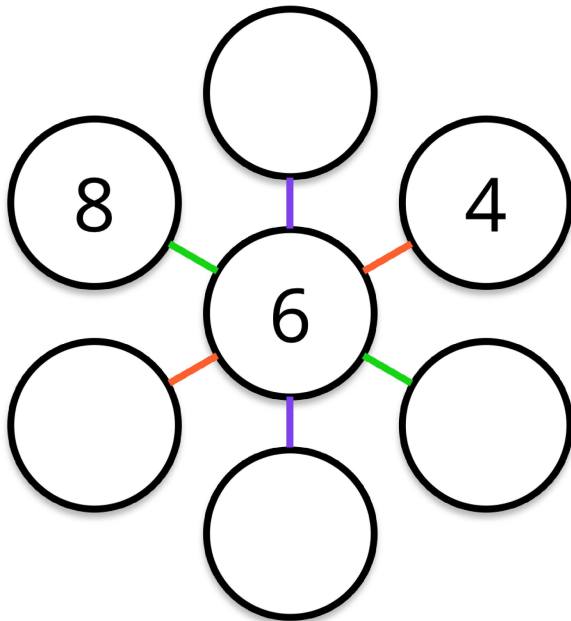


**MATHS
QUEST**
2026

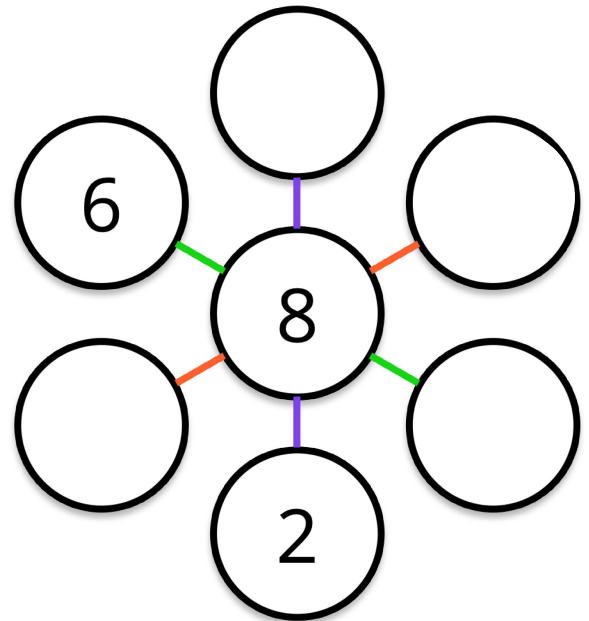
Name/s: _____

All Lines Alike B

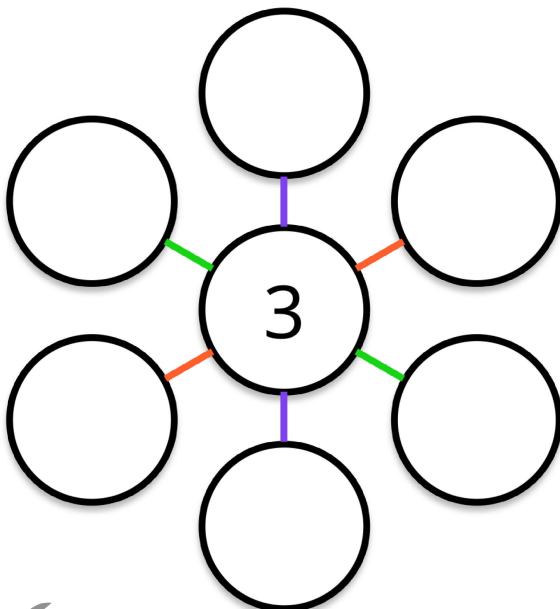
Place **6, 2, 3 and 7** into a circle.
Each line of circles must add up to **16**.



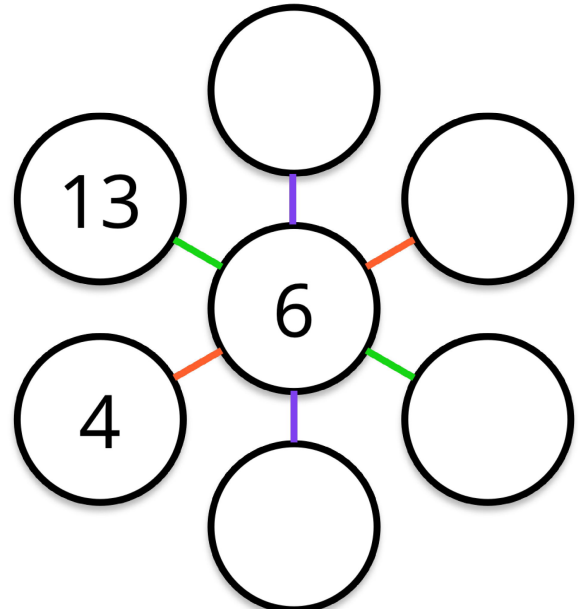
Place **10, 7, 5 and 6** into a circle.
Each line of circles must add up to **20**.



Place **6, 7, 10, 8, 3 and 5** into a circle.
Each line of circles must add up to **16**.



Place **6, 12, 14 and 5** into a circle.
Each line of circles must add up to **24**.



2	3	5	6	7	8	10	12	14
---	---	---	---	---	---	----	----	----



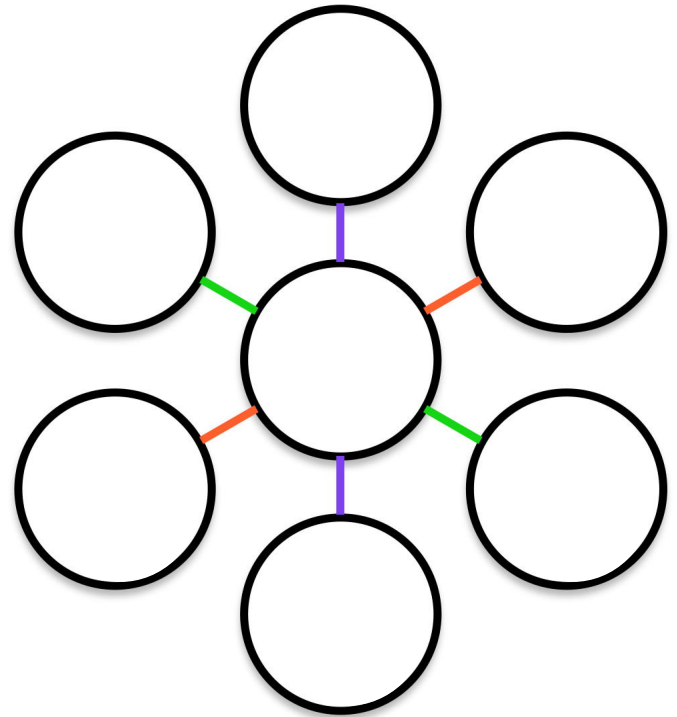
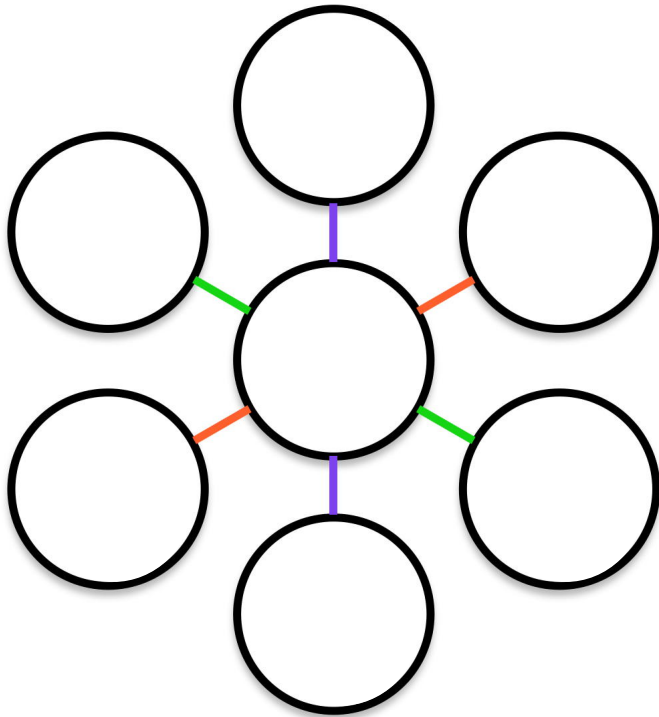
MATHS
QUEST
2026

Name/s: _____

All Lines Alike C Challenge

Place **6, 8, 2, 2, 4, 9 and 1** into a circle.
Each line of circles must add up to **12**.

Place **7, 3, 6, 2, 5, 10 and 6** into a circle.
Each line of circles must add up to **15**.



6	8	2	2	4	9	1
---	---	---	---	---	---	---

7	3	6	2	5	10	6
---	---	---	---	---	----	---

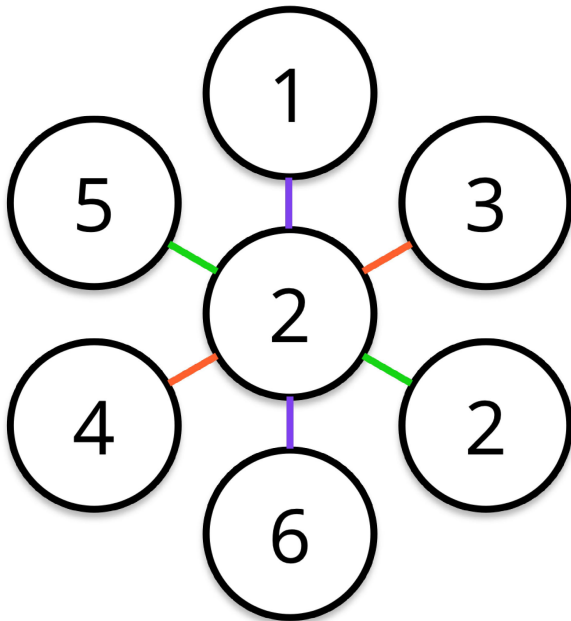


MATHS
QUEST
2026

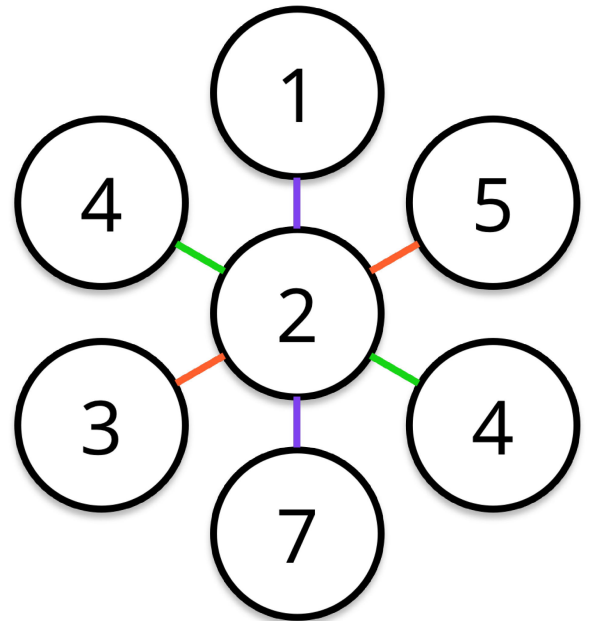
Name/s: _____

All Lines Alike A SOLUTIONS

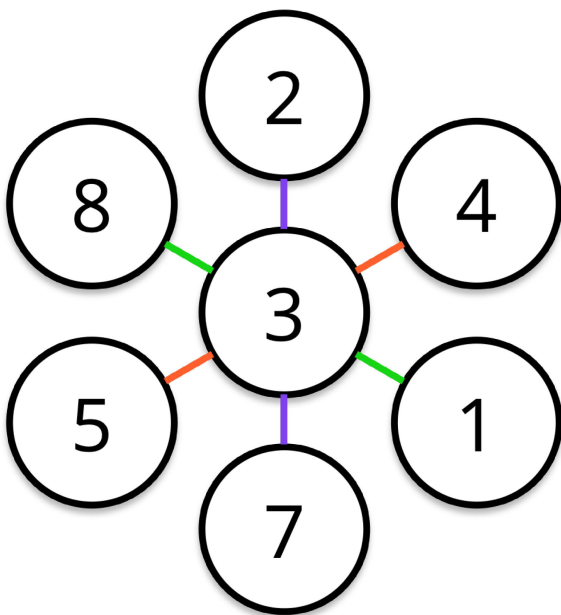
Place **4, 2, 5 and 1** into a circle.
Each line of circles must add up to **9**.



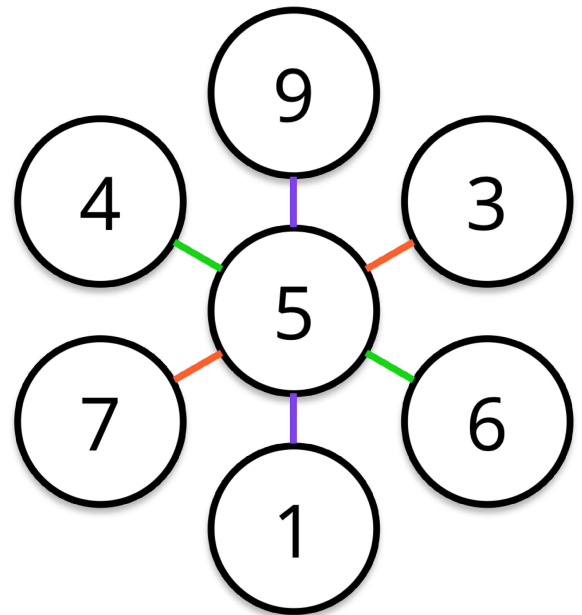
Place **5, 3, 7 and 4** into a circle.
Each line of circles must add up to **10**.



Place **8, 2, 4 and 7** into a circle.
Each line of circles must add up to **12**.



Place **3, 7, 1 and 4** into a circle.
Each line of circles must add up to **15**.



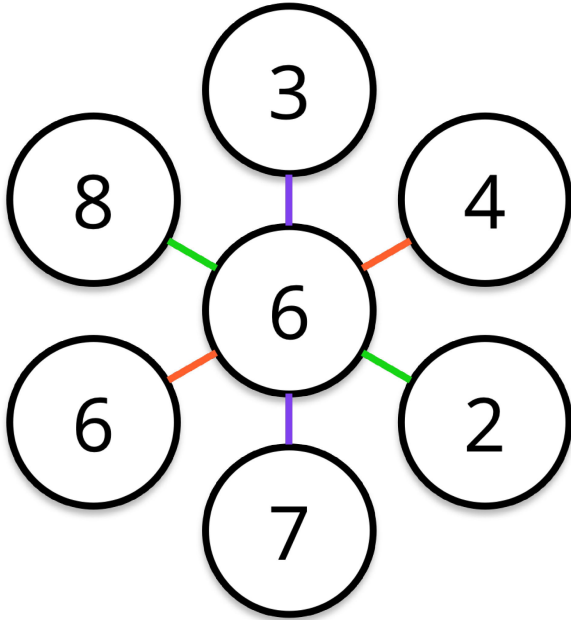


MATHS
QUEST
2026

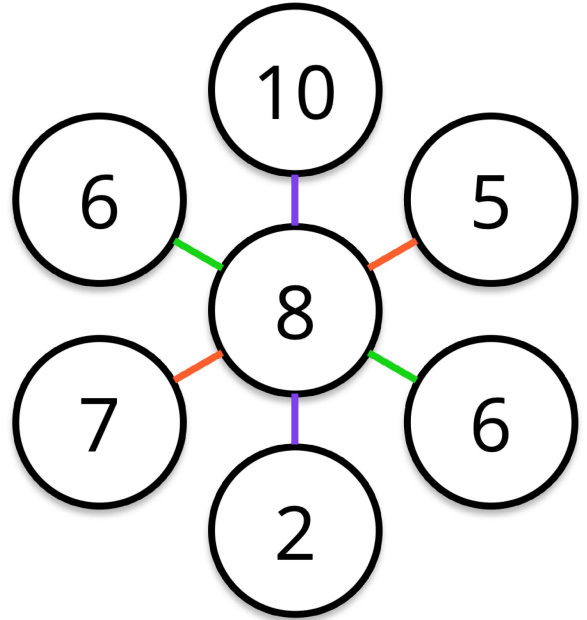
All Lines Alike B SOLUTIONS

Name/s: _____

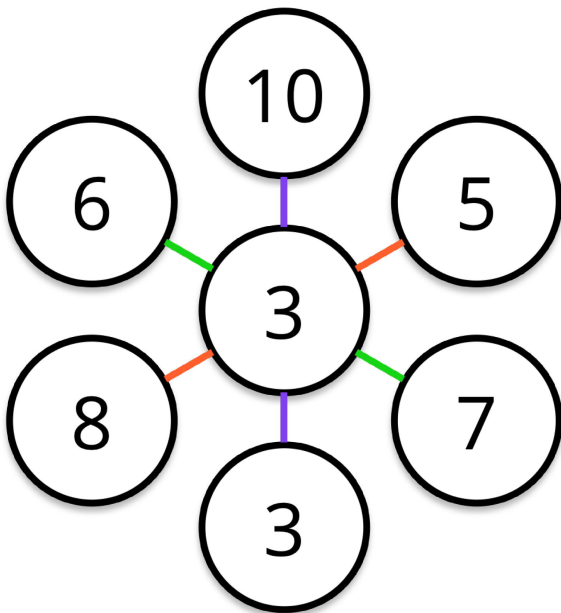
Place **6, 2, 3 and 7** into a circle.
Each line of circles must add up to **16**.



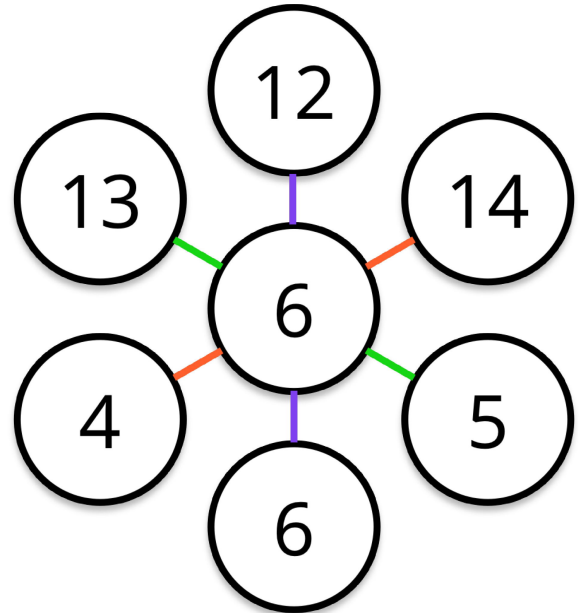
Place **10, 7, 5 and 6** into a circle.
Each line of circles must add up to **20**.



Place **6, 7, 10, 8, 3 and 5** into a circle.
Each line of circles must add up to **16**.



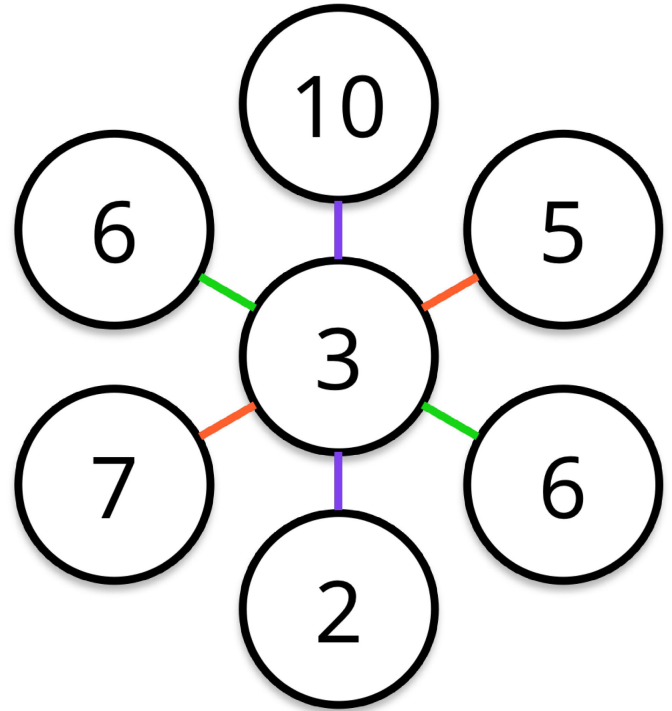
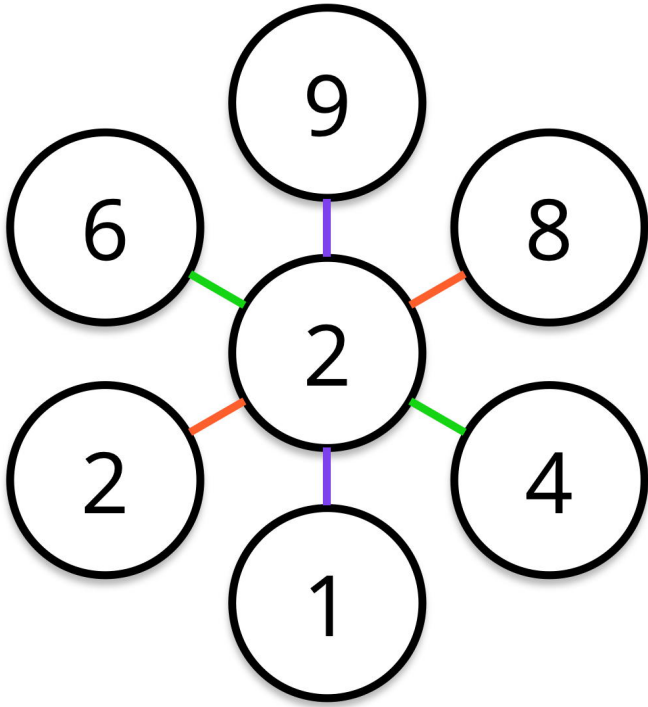
Place **6, 12, 14 and 5** into a circle.
Each line of circles must add up to **24**.



All Lines Alike C
SOLUTIONS

Place **6, 8, 2, 2, 4, 9 and 1** into a circle.
Each line of circles must add up to **12**.

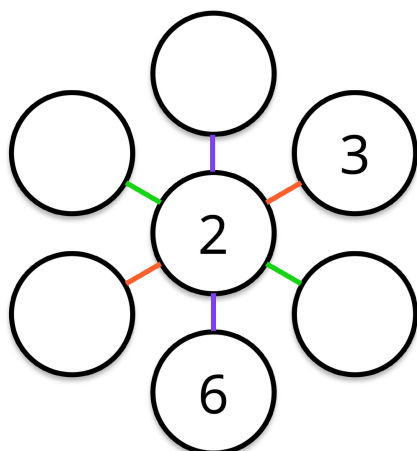
Place **7, 3, 6, 2, 5, 10 and 6** into a circle.
Each line of circles must add up to **15**.



All Lines Alike

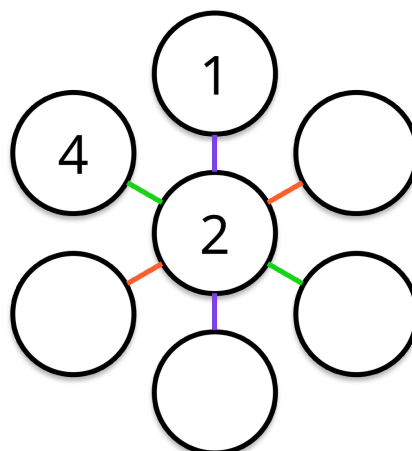
Place each number into a circle.
Each line of circles must add up to **9**.

4 2 5 1



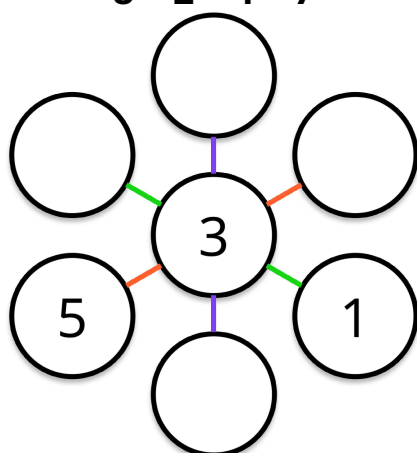
Place each number into a circle.
Each line of circles must add up to **10**.

5 3 7 4



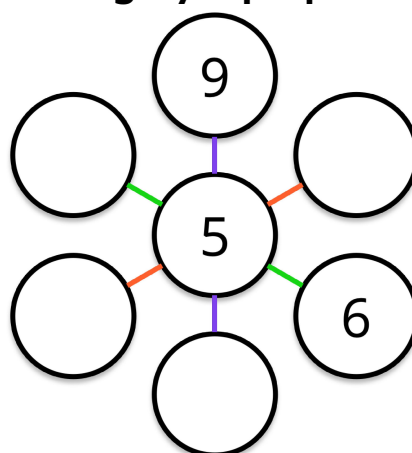
Place each number into a circle.
Each line of circles must add up to **12**.

8 2 4 7



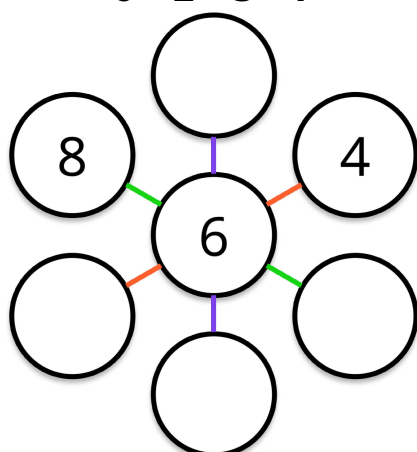
Place each number into a circle.
Each line of circles must add up to **15**.

3 7 1 4



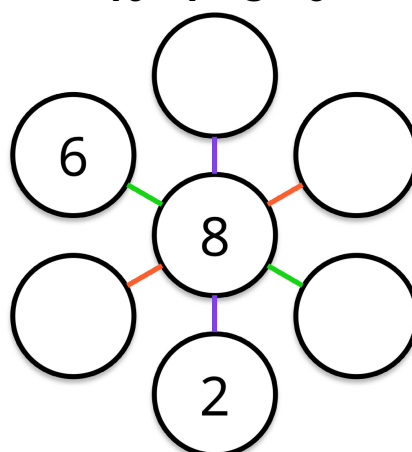
Place each number into a circle.
Each line of circles must add up to **16**.

6 2 3 7



Place each number into a circle.
Each line of circles must add up to **20**.

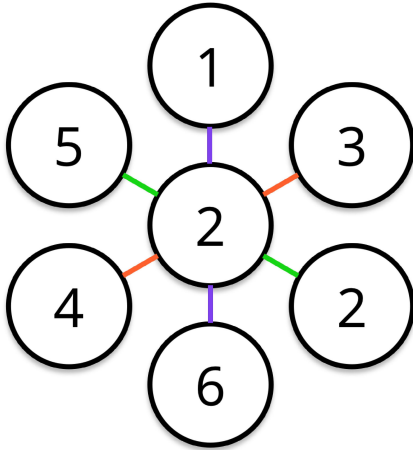
10 7 5 6



All Lines Alike - Solutions

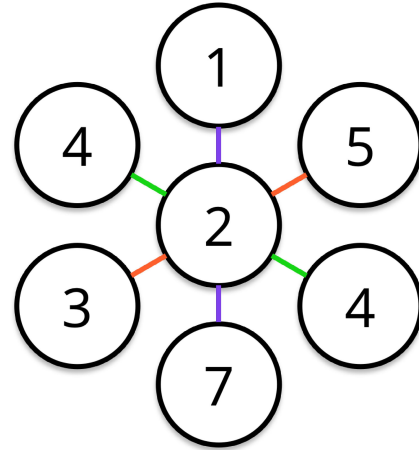
Place each number into a circle.
Each line of circles must add up to **9**.

4 2 5 1



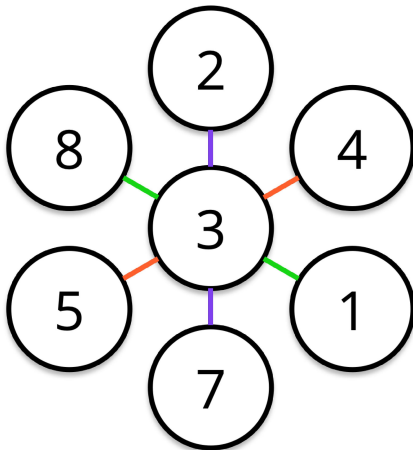
Place each number into a circle.
Each line of circles must add up to **10**.

5 3 7 4



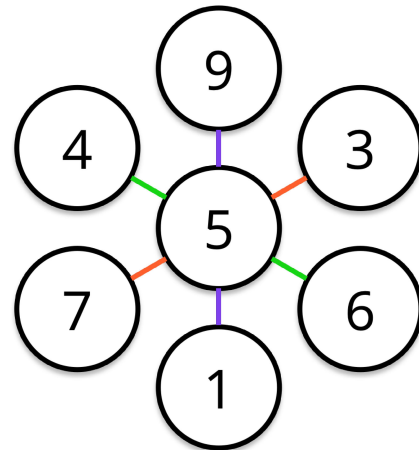
Place each number into a circle.
Each line of circles must add up to **12**.

8 2 4 7



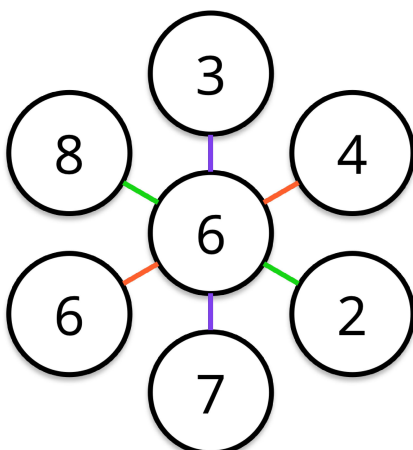
Place each number into a circle.
Each line of circles must add up to **15**.

3 7 1 4



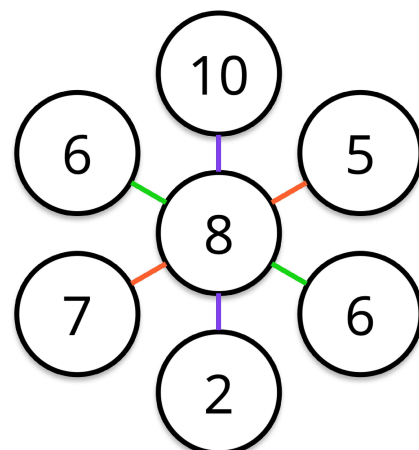
Place each number into a circle.
Each line of circles must add up to **16**.

6 2 3 7



Place each number into a circle.
Each line of circles must add up to **20**.

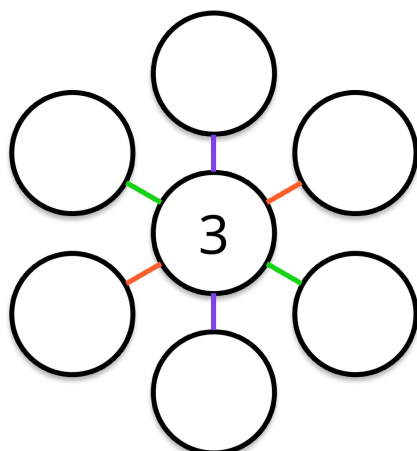
10 7 5 6



All Lines Alike Challenge

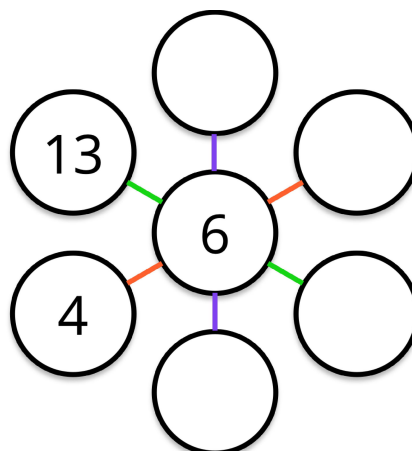
Place each number into a circle.
Each line of circles must add up to **16**.

6 7 10 8 3 5



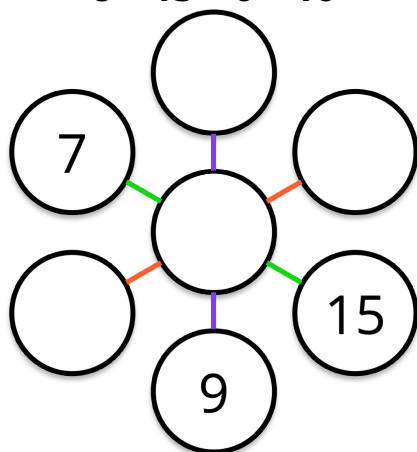
Place each number into a circle.
Each line of circles must add up to **24**.

6 12 14 5 6



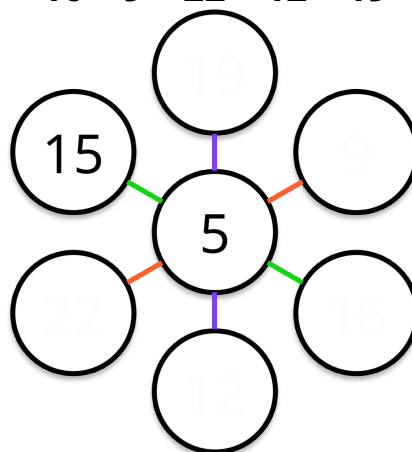
Place each number into a circle.
Each line of circles must add up to **30**.

8 13 6 16



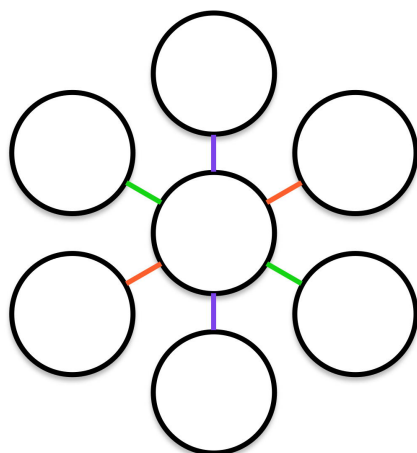
Place each number into a circle.
Each line of circles must add up to **36**.

16 9 22 12 19



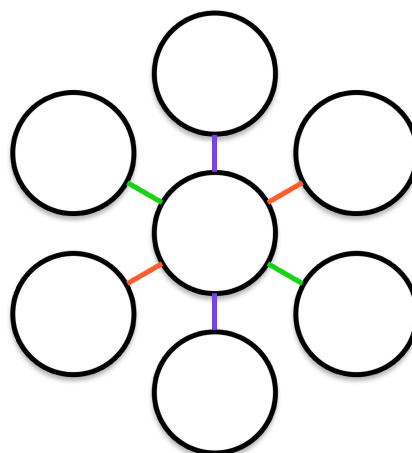
Place each number into a circle.
Each line of circles must add up to **12**.

6 8 2 2 4 9 1



Place each number into a circle.
Each line of circles must add up to **15**.

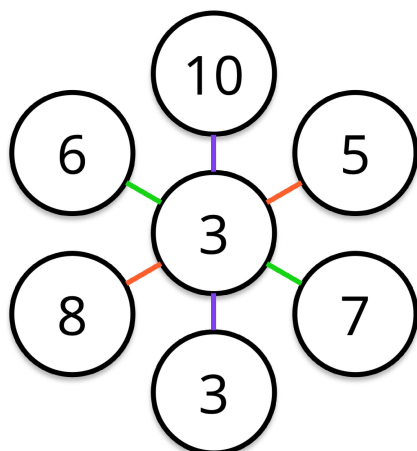
7 3 6 2 5 10 6



All Lines Alike Challenge

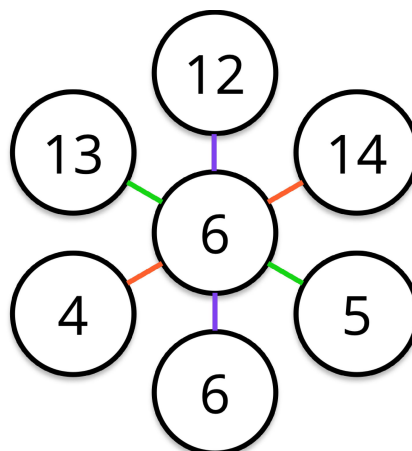
Place each number into a circle.
Each line of circles must add up to **16**.

6 7 10 8 3 5



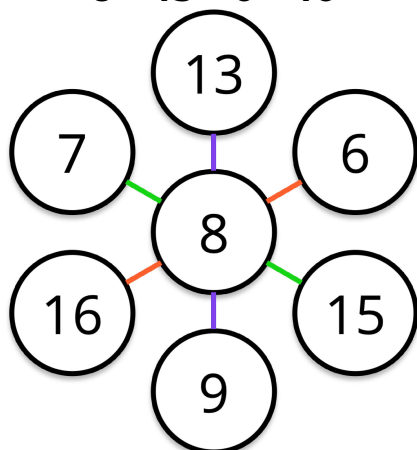
Place each number into a circle.
Each line of circles must add up to **24**.

6 12 14 5 6



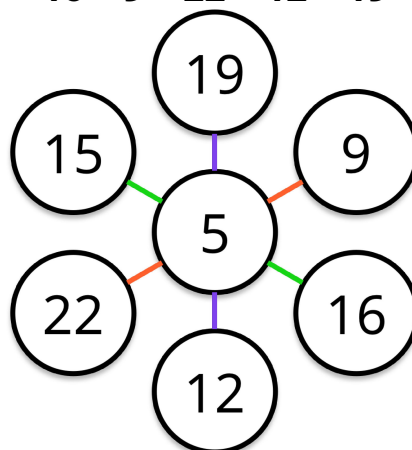
Place each number into a circle.
Each line of circles must add up to **30**.

8 13 6 16



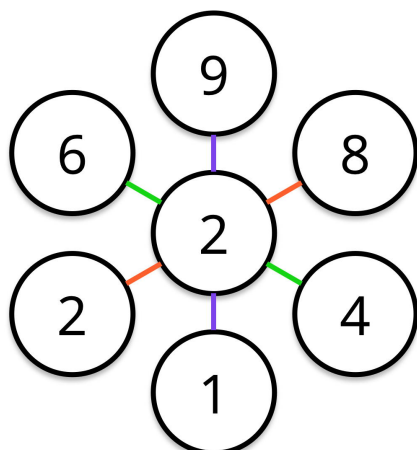
Place each number into a circle.
Each line of circles must add up to **36**.

16 9 22 12 19



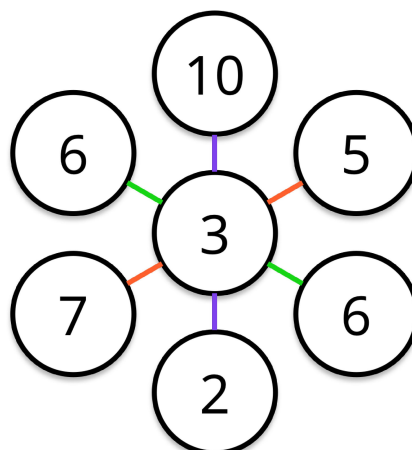
Place each number into a circle.
Each line of circles must add up to **12**.

6 8 2 2 4 9 1



Place each number into a circle.
Each line of circles must add up to **15**.

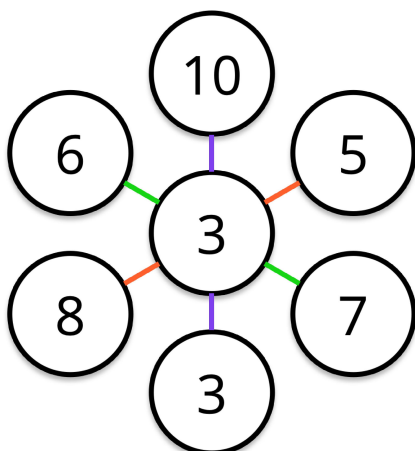
7 3 6 2 5 10 6



All Lines Alike Challenge - Solutions

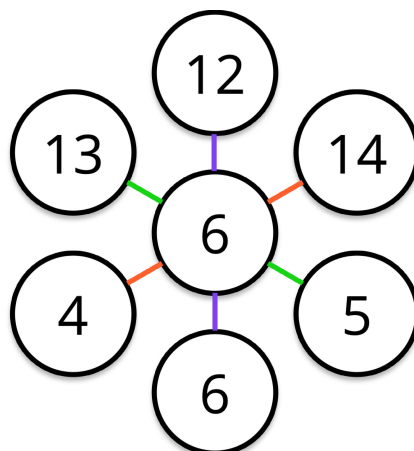
Place each number into a circle.
Each line of circles must add up to **9**.

4 2 5 1



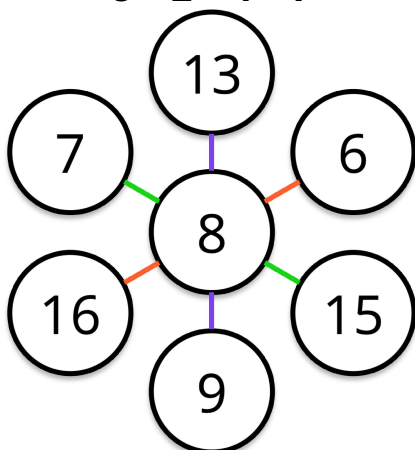
Place each number into a circle.
Each line of circles must add up to **10**.

5 3 7 4



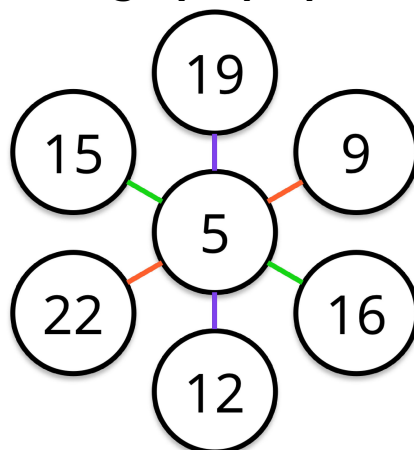
Place each number into a circle.
Each line of circles must add up to **12**.

8 2 4 7



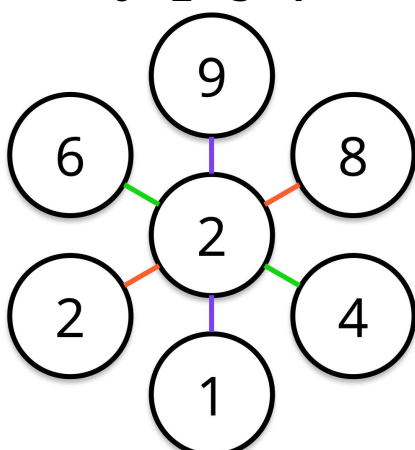
Place each number into a circle.
Each line of circles must add up to **15**.

3 7 1 4



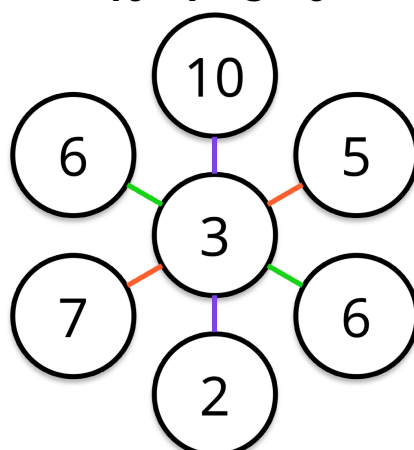
Place each number into a circle.
Each line of circles must add up to **16**.


6 2 3 7



Place each number into a circle.
Each line of circles must add up to **20**.

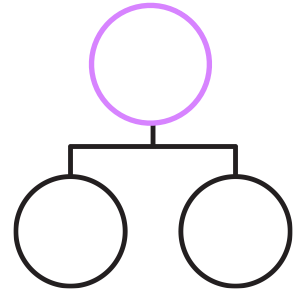
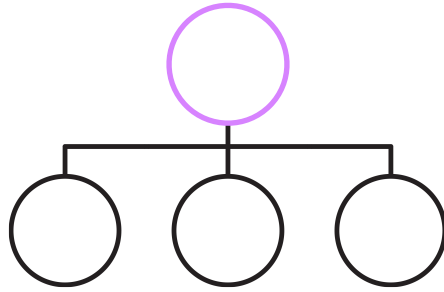
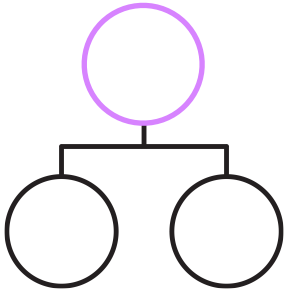
10 7 5 6



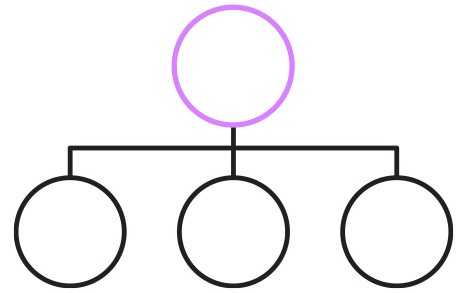
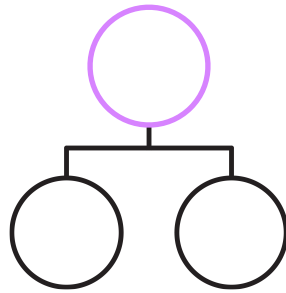
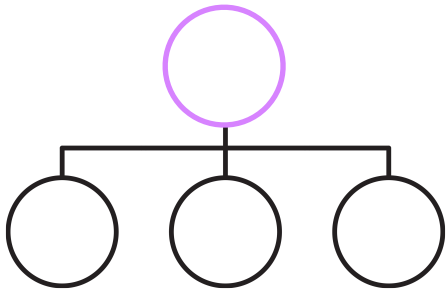


Fill the Frames

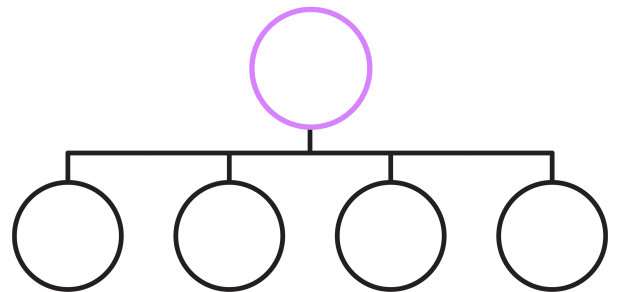
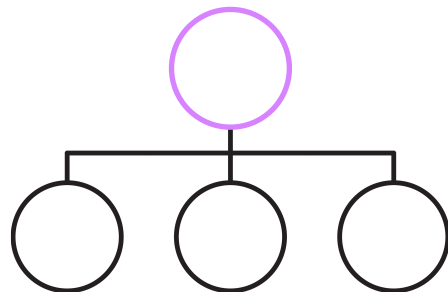
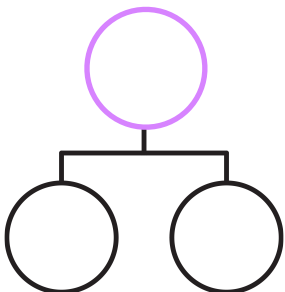
Name/s: _____



4 1 5 1 1 3 2 3 1 3



4 1 5 1 1 3 2 3 1 3



Bigger - Smaller - Combined

2 players

2 dice

1 pencil

Before each roll, players take turns put the counter on smaller or bigger.

Both players roll at the same time. If the counter is on bigger, find a place for the bigger number that was rolled.

If the counter is on smaller, find a place for the smaller number to go.