


Draw a Diagram to Share and Compare #1

Mitchell and Bianca share 7 lollipops.

Mitchell gets 3 more lollipops than Bianca.


How many lollipops does Bianca get?



Emily and Noah pick 13 flowers to share.

Emily picks 3 more flowers than Noah.

How many flowers does Noah have?

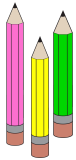


Draw a Diagram to Share and Compare #2

Olivia and Liam share 14 pencils.

Olivia has 2 more pencils than Liam.

How many pencils does Liam have?



Daniel and Mia find 16 shells to share.

Daniel gets 4 more shells than Mia.

How many shells does Daniel have?



Draw a Diagram to Share and Compare #3

Pete, Ari and James share 14 toy cars.

Pete has 4 cars.

Ari and James have the same number of cars.

How many cars does Ari have?




Lia, Emily and Zofia share 13 marbles.

Zofia has 5 marbles.

Lia and Emily have the same number of marbles.

How many marbles does Lia have?



Draw a Diagram to Share and Compare #4

Ava, Lucas, and Mia share 12 balloons.

Mia has 4 balloons.

Ava has 2 more balloons than Lucas.

How many balloons does Lucas have?



Nathan, Zoe, and Lily share 18 jellybeans.

Nathan has 5 jellybeans.

Zoe has 3 more jellybeans than Lily.

How many jellybeans does Lily have?



Draw a Diagram to Share and Compare #5 Challenge

14 cookies are shared between 3 jars: a blue jar, a green jar, and a yellow jar.

The blue jar has 2 more cookies than the green jar.

The yellow jar has 6 cookies.

The green jar has 3 fewer cookies than the yellow jar.

How many cookies are in the blue jar?




23 pencils are shared between 3 children.

Romeo has 2 more pencils than Travis.

Annie has 5 pencils.

Travis has 3 more pencils than Annie.

How many pencils does Romeo have?



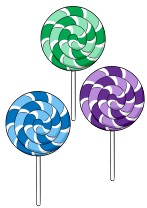
Draw a Diagram to Share #1

Mitchell and Bianca share 8 lollipops.

3

Mitchell gets 2 more lollipops than Bianca.

How many lollipops does Bianca get?




Emily and Noah pick 13 flowers to share.

5

Emily picks 3 more flowers than Noah.

How many flowers does Noah have?



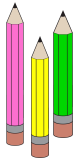
Draw a Diagram to Share #2

Olivia and Liam share 14 pencils.

6

Olivia has 2 more pencils than Liam.

How many pencils does Liam have?



Daniel and Mia find 16 shells to share.

10

Daniel gets 4 more shells than Mia.

How many shells does Daniel have?

**MATHS
QUEST**

Draw a Diagram to Share #3

Pete, Ari and James share 14 toy cars.

5

Pete has 4 cars.

Ari and James have the same number of cars.

How many cars does Ari have?




Lia, Emily and Zofia share 13 marbles.

4

Zofia has 5 marbles.

Lia and Emily have the same number of marbles.

How many marbles does Lia have?



Draw a Diagram to Share #4

Ava, Lucas, and Mia share 12 balloons.

3

Mia has 4 balloons.

Ava has 2 more balloons than Lucas.

How many balloons does Lucas have?



Nathan, Zoe, and Lily share 18 jellybeans.

5

Nathan has 5 jellybeans.

Zoe has 3 more jellybeans than Lily.

How many jellybeans does Lily have?



Draw a Diagram to Share #5 Challenge

14 cookies are shared between 3 jars: a blue jar, a green jar, and a yellow jar.

The blue jar has 2 more cookies than the green jar.

The yellow jar has 6 cookies.

The green jar has 3 fewer cookies than the yellow jar.

How many cookies are in the blue jar?

5



23 pencils are shared between 3 children.


Romeo has 2 more pencils than Travis.

Annie has 5 pencils.

Travis has 3 more pencils than Annie.

How many pencils does Romeo have?

10

**MATHS
QUEST**