



APSMO

A not-for-profit organisation




Problem of the Week: Find My Shape

My shape has more than three corners.

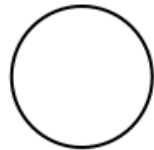
My shape only has right angles.

Some sides of my shape are longer than other sides.


What is my shape?



Square



Circle



Trapezium



Pentagon



Rectangle



Triangle