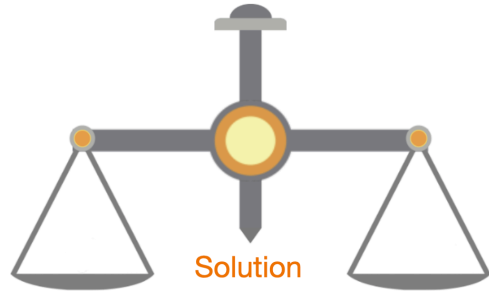


Name: \_\_\_\_\_

How many \_\_\_\_\_ to balance \_\_\_\_\_ ?

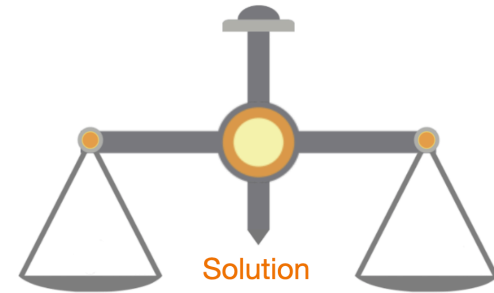
=  =  =



Name: \_\_\_\_\_

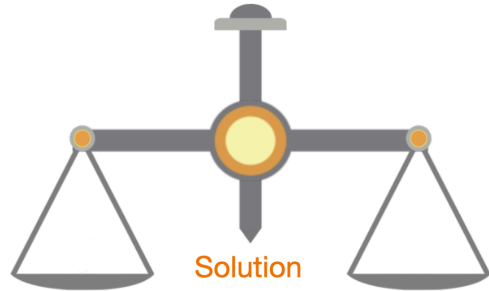
How many \_\_\_\_\_ to balance \_\_\_\_\_ ?

=  =  =



How many \_\_\_\_\_ to balance \_\_\_\_\_ ?

=  =  =



How many \_\_\_\_\_ to balance \_\_\_\_\_ ?

=  =  =

