


Challenge #1

Names: _____

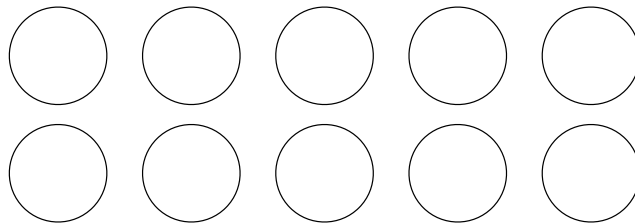
Two solutions are possible with these clues and counters.
Show them both.



The Purple counter is in the middle

Black is between Purple and Green

Blue is not at an end



A not-for-profit organisation Copyright © 2022 Australasian Problem Solving Mathematical Olympiads (APSMO) Inc. All rights reserved.

Challenge #2

Names: _____

Here is a coin line up. There are two clues given.
Write one more clue that will make this line up the only possible solution.

\$1 is between \$2 and 50c

20c is at an end



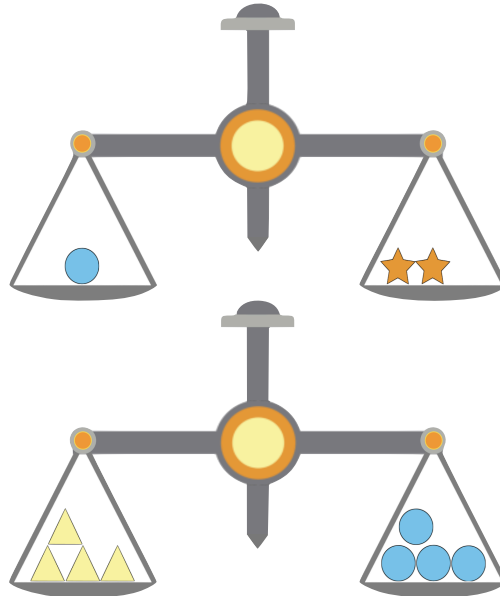
A not-for-profit organisation Copyright © 2022 Australasian Problem Solving Mathematical Olympiads (APSMO) Inc. All rights reserved.

Challenge #3

Names: _____

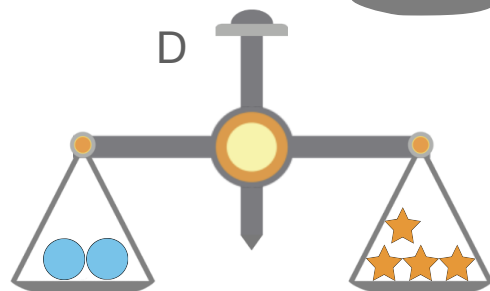
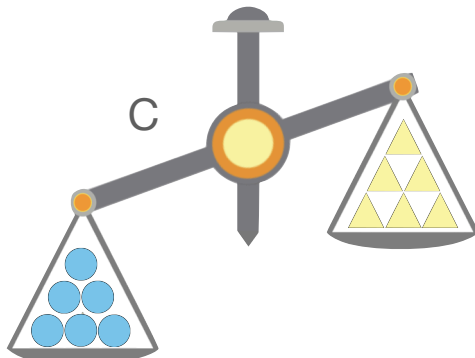
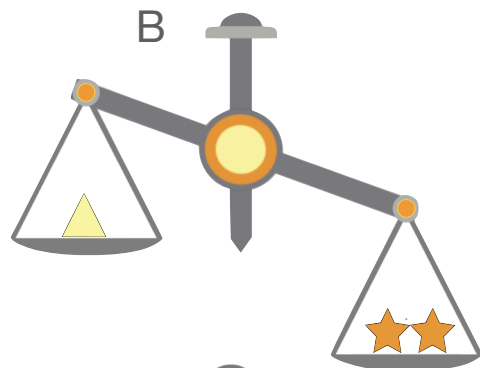
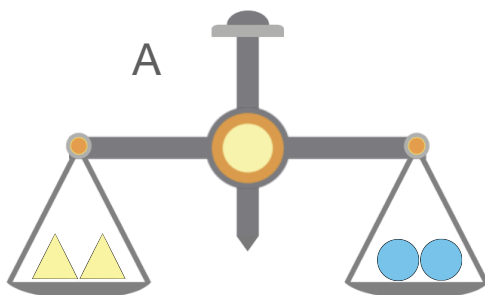
These balance scales are working perfectly.

What they show is true.



Some of these scales are tricking you.

Use the scales above to find two that are true.

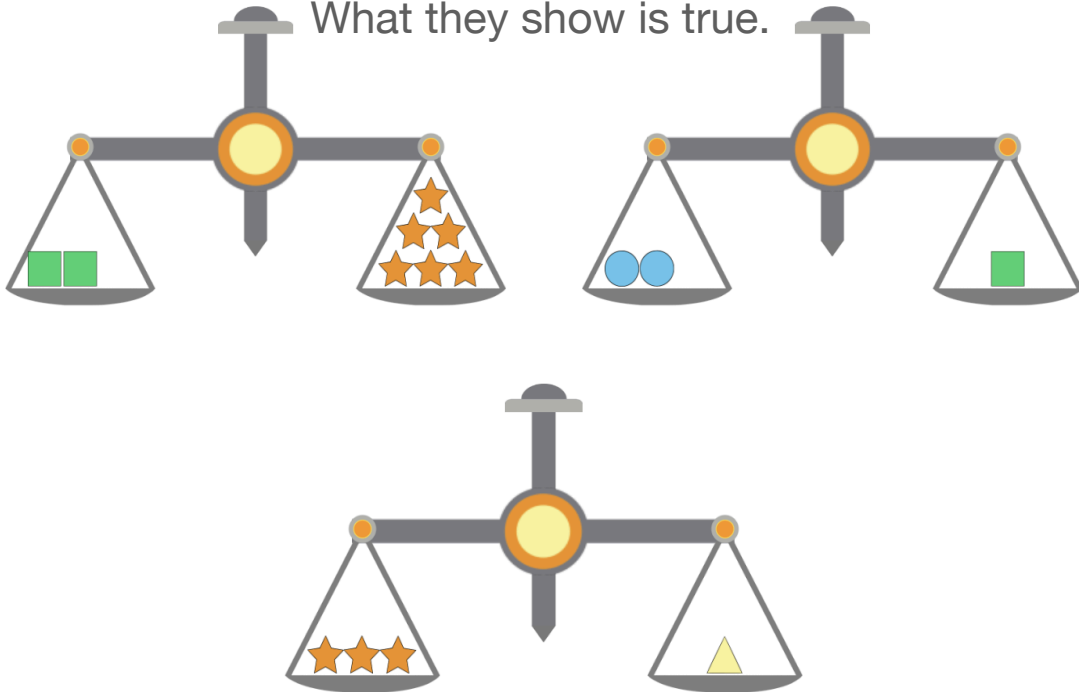


Challenge #4

Names: _____

These balance scales are working perfectly.

What they show is true.



Some of these scales are tricking you.
Use the scales above to find two that are true.

