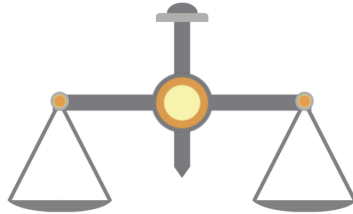


Name: _____

How many _____ to balance _____ ?

□	=	□	=	□	=	□
□	=	□	=	□	=	□
□	=	□	=	□	=	□
□	=	□	=	□	=	□

Solution

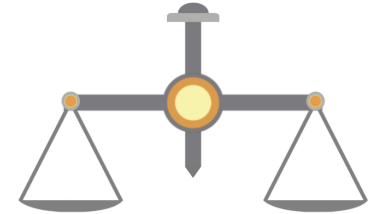


Name: _____

How many _____ to balance _____ ?

□	=	□	=	□	=	□
□	=	□	=	□	=	□
□	=	□	=	□	=	□
□	=	□	=	□	=	□

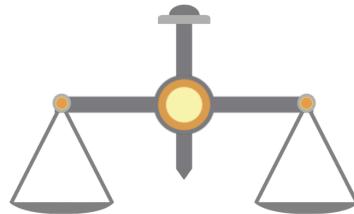
Solution



How many _____ to balance _____ ?

□	=	□	=	□	=	□
□	=	□	=	□	=	□
□	=	□	=	□	=	□
□	=	□	=	□	=	□

Solution



How many _____ to balance _____ ?

□	=	□	=	□	=	□
□	=	□	=	□	=	□
□	=	□	=	□	=	□
□	=	□	=	□	=	□

Solution

