









Finding all Possibilities Problem designed by Melan, Edison and Olivia :

In these problems, doughnuts can be made with just icing on top, or icing and sprinkles.



- 1) How many doughnuts can you make without heart sprinkles that cost \$2?
- 2) I want to have a chocolate base. How many doughnuts can you make for me?
- 3) How many doughnuts can you make without heart sprinkles?
- 4) My favourite topping is blueberry icing. How many types of doughnuts can you make with blueberry icing?
- 5) How many doughnuts can you make that cost \$2.50 without using blueberry icing?

Base	Icing	Sprinkles
 Vanilla \$1	 Strawberry 50c	 Spots 50c
 Chocolate \$1.50	 Blueberry 50c	 Hearts \$1
		 Lines 50c